

# Warwick School



13+ Sample Paper

## Mathematics

Please write your full name here:

---

Before you start read these instructions:

- This test lasts one hour.
- The marks for each part of each question are given in brackets.
- We would like to see how you worked out your answers, so show your working. You may receive some credit even if the answer is wrong.
- If you get stuck, just go on to the next question. You may have time at the end to try the question again.
- Do **not** use a calculator.

Remember to show your working

1) Calculate:

a)  $3\frac{2}{3} - 1\frac{3}{4}$  ..... [2]

.....  
.....

b)  $6\frac{3}{4} \div 1\frac{1}{2}$  ..... [2]

.....  
.....

2) Simplify:

a)  $2x + 3y + 4x - 2y$  ..... [2]

b)  $p^2 + p^2 + p^2$  ..... [1]

3) Work out the value of  $3x - 4y$  when  $x = -2$  and  $y = -5$ . [2]

.....  
.....

4) Nick takes 28 boxes out of his van. Each box weighs 32.9 kg. Work out the total weight of all the boxes. [3]

.....  
.....  
.....  
.....  
.....

Remember to show your working

- 5) 60 British students visited one foreign country last week. The two-way table shows some of the information about these students.

	France	Germany	Spain	Total
Female			9	34
Male	15			
Total		25	18	60

- a) Complete the two-way table. [3]

.....

.....

.....

.....

One of the students is picked at random.

- b) Write down the probability that the student visited Germany last week. [1]

.....

.....

- 6) There are 600 pupils at Prestfield School; 55% of them are boys.

- a) How many boys are at Prestfield School? [2]

.....

.....

168 pupils are in the Sixth Form.

- b) What percentage of pupils are in the Sixth Form? [2]

.....

.....

Remember to show your working

7) Solve the following equations:

a)  $5a - 2 = 28$  ..... [2]

.....  
.....

b)  $4(3d + 1) = 3(2d + 3)$  ..... [3]

.....  
.....  
.....

c)  $\frac{2e + 5}{3} = 6$  ..... [3]

.....  
.....  
.....

8) 20 pupils scored goals for their school hockey teams last month. The table gives information about the number of goals they scored.

Goals scored	Number of pupils	
1	8	
2	4	
3	6	
4	2	

Work out the mean number of goals scored. [3]

.....  
.....  
.....

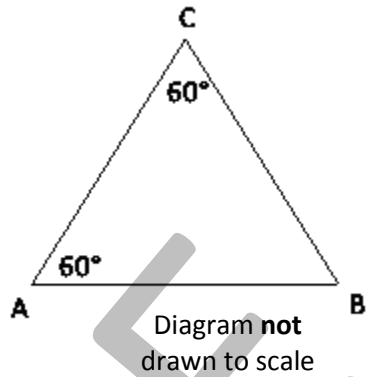
Remember to show your working

9) a) Find the size of angle B. [1]

.....  
.....

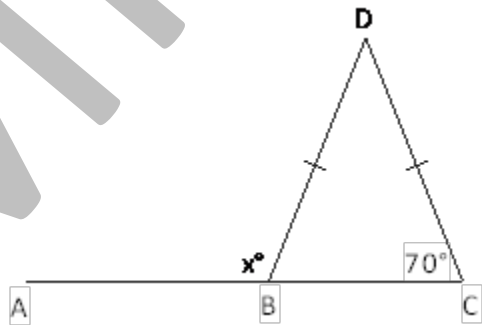
b) Explain why ABC is an equilateral triangle. [1]

.....  
.....  
.....



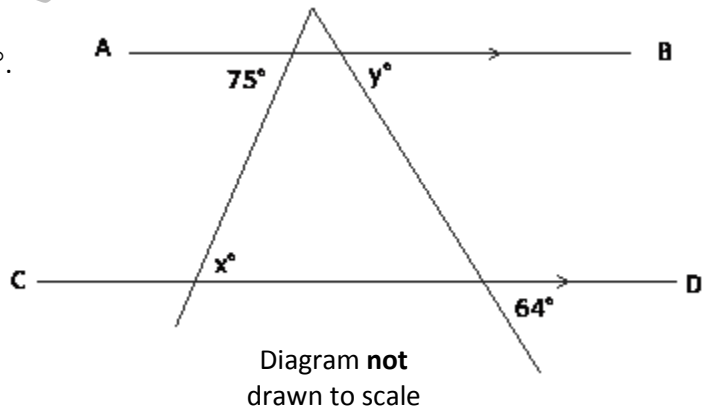
10) ABC is a straight line and  $BD = CD$ .  
Work out the size of angle  $x^\circ$ , giving reasons for your answer. [3]

.....  
.....  
.....  
.....



11) AB is parallel to CD.  
Find the size of angles  $x^\circ$  and  $y^\circ$ . [2]

.....  
.....  
.....  
.....

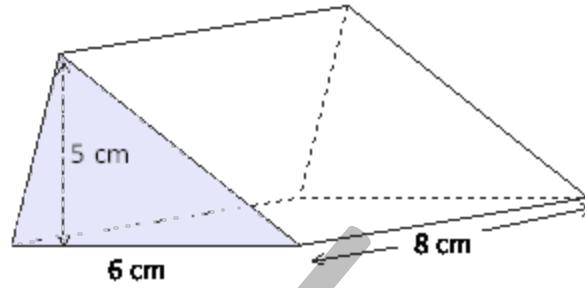


Remember to show your working

12) The diagram shows a triangular prism. Its cross section is shaded.

a) What is its cross sectional area?

.....  
.....  
.....



[2]

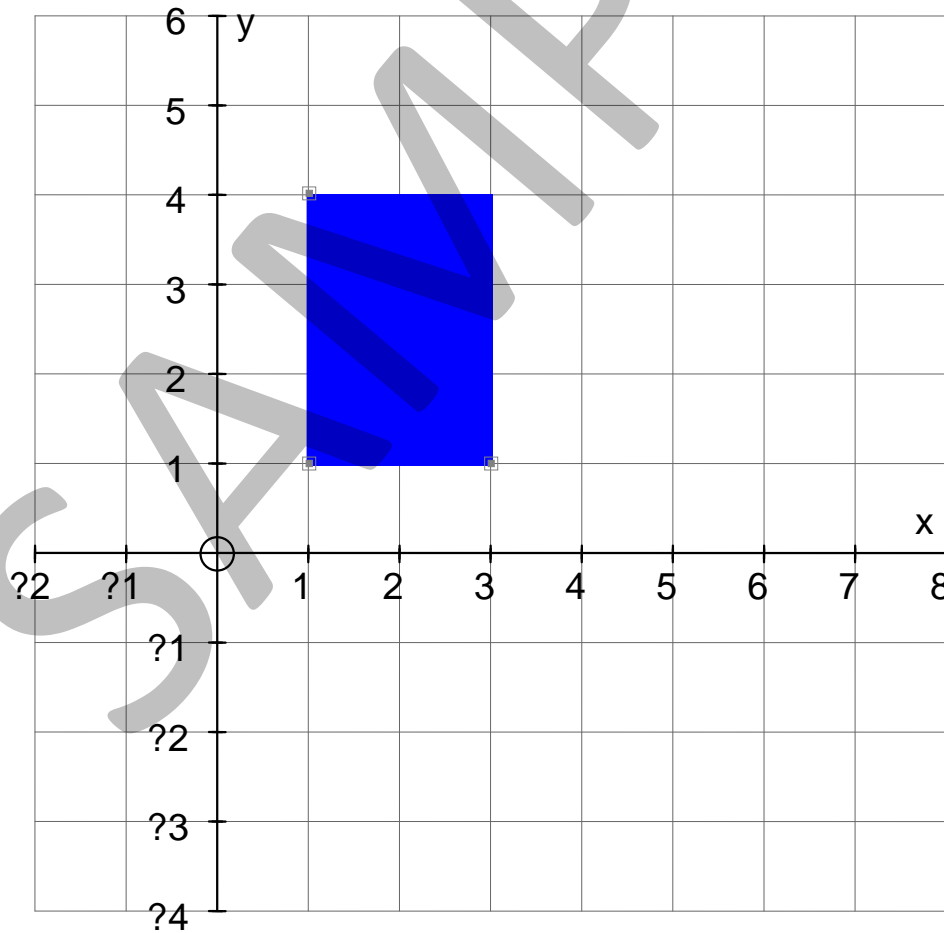
b) What is its volume?

.....  
.....

[2]

13) Enlarge the shaded triangle by a scale factor of 2, centre  $(-1,3)$ .

[3]



Remember to show your working

- 14) Simon cycled from his home to a friend's house, stayed in there for a bit and then cycled home. This is shown in this distance-time graph.

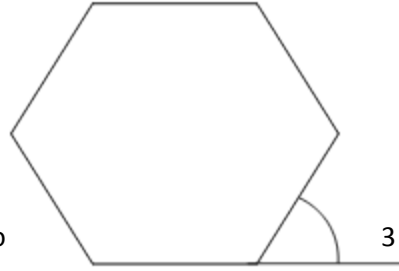


- a) When did Simon leave home? [1]  
.....
- b) How long was he at his friend's house? [1]  
.....
- c) How far did he cycle altogether? [1]  
.....
- d) How fast did he cycle on his way to his friend's house? [2]  
.....  
.....
- e) Did he cycle faster on the way there or on the way back? Give a reason for your answer. [1]  
.....  
.....

Remember to show your working

- 15) a) Work out the size of the exterior angle of a regular hexagon. [2]

.....  
.....  
.....



The area of the hexagon is  $4580 \text{ mm}^2$ , correct to significant figures.

Diagram **not** drawn to scale

- b) What is the area in  $\text{cm}^2$ ? [2]

.....  
.....

- c) What is the least possible value of the area in  $\text{mm}^2$ ? [1]

.....

- d) What is the greatest possible value of the area in  $\text{mm}^2$ ? [1]

.....

- 16) a) Express 135 as the product of its prime factors. [3]

.....  
.....  
.....  
.....

- b) Find the highest common factor (hcf) of 135 and 180. [2]

.....  
.....  
.....  
.....



Remember to show your working

- 17) Calculate the size of the largest angle in the quadrilateral. [4]

.....  
.....  
.....  
.....  
.....

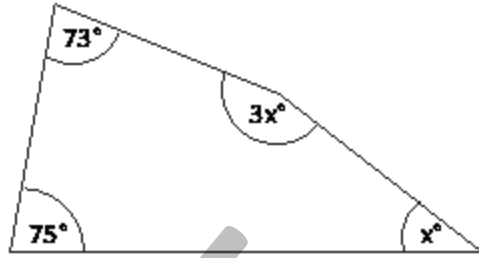


Diagram **not**  
drawn to scale

- 18) A diamond ring is bought in 2006. Every year its value increases by 20%. In 2007 it was worth £3000.

- a) What was the ring worth in 2009? [4]

.....  
.....  
.....  
.....

- b) What was the ring worth in 2006? [3]

.....  
.....  
.....

**END OF EXAMINATION**

**Now go back and check your answers, and  
try any questions you may have left out.**